

Canonbury Home Learning

Year 1 Maths

Steppingstone activity



Lesson 13

LO: To compare length and height.

Success Criteria:

1. Find two or more objects at a time to compare the length
2. Put them into the correct order
3. Find two or more objects at a time to compare the height
4. Put them into the correct order


Model

Children to recognise this language will change depending on what type of length they are describing and comparing.

Choose other objects. Compare the length.

Choose other objects. Compare the height.

1. The family want to stand in order from tallest to shortest.



Write their names in the correct order.

Year 1 Maths

Lesson 11

LO: To compare length and height.

Success Criteria:

1. Find two or more objects at a time to compare the length
2. Put them into the correct order
3. Find two or more objects at a time to compare the height
4. Put them into the correct order


Model:

The children will recognise this language will change depending on what type of length they are describing and comparing.

Choose other objects around your house. Compare the length.

Choose other objects around your house. Compare the height.

4. The family want to stand in order from shortest to tallest.


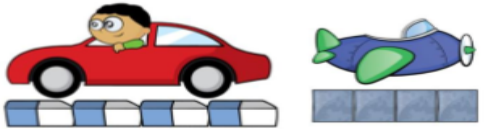
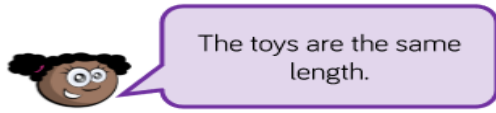
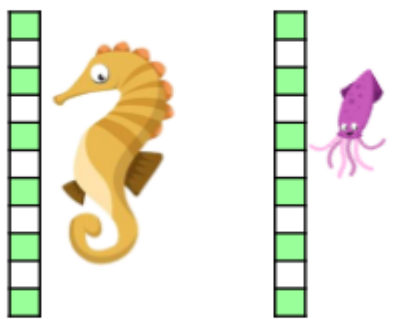


Write their names in the correct order.

What other things could you use to compare, how long is a pencil? Is it shorter or longer than a glue stick?

What could you use to measure how tall you are? Is it easier to measure someone lying down or standing up?

Which objects are you taller than?

Task 1	Task 2	Task 3
<p>Choose your own objects.</p> <p>2a. A <u>hat</u> is shorter than the scarf but taller than the gloves.</p>  <p>How many cubes could the <u>hat</u> measure?</p>	<p>Whitney measures the length of two toys.</p>  <p>She says,</p>  <p>Do you agree with Whitney? Explain your answer.</p> <p>Task 4</p> <p>8b. A <u>crab</u> is shorter than the seahorse but taller than the squid.</p>  <p>How many cubes could the <u>crab</u> measure? Find three possibilities.</p>	<p>Please scroll down for task three.</p> <p>Order the animals shortest to tallest.</p>



Giraffe



Panda



Monkey



Bird



Elephant

Canonbury Home Learning

- | |
|----|
| 16 |
| 15 |
| 14 |
| 13 |
| 12 |
| 11 |
| 10 |
| 9 |
| 8 |
| 7 |
| 6 |
| 5 |
| 4 |
| 3 |
| 2 |
| 1 |