

Year 1 Maths

Date: Tuesday 28.4.2020

LO: To compare the volume in different containers

Success Criteria:

1. Find a range of different containers
2. Use water or sand
3. Compare the volume in two or more containers with sand or water in it

Model

Compare the volume in each container by describing whether it is full, nearly full, half, empty or nearly empty.

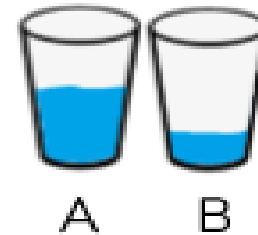
Compare these two containers, which has more liquid in? Which has less?

Use the words 'more' or 'less' to compare the containers.



A has _____ than B.

A has _____ than B.



Year 1 Maths

Main activity Complete at least 2 tasks, more if you can.

Task 1

Choose a range of different containers and explore practically using water or sand.

Use the language; full, empty, half, almost full, almost empty.

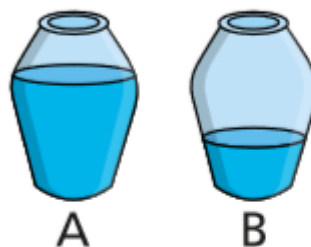


Task 2

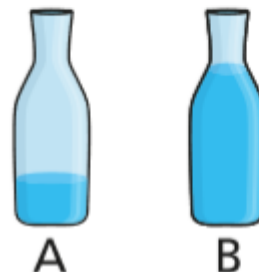
Choose a word to complete the sentence.

more

less



A has _____ than B.



A has _____ than B.

Task 3

Rosie, Teddy and Amir are describing their glasses of water.



My glass has more water than Teddy's.

Rosie

My glass is nearly full.



Teddy



My glass has less water than Rosie's.

Amir

Can you fill in how much water could be in each of the children's glasses?



Answer for this task will be on tomorrow's maths work

Task 4

Compare the volume in each container by describing whether it is full, nearly full, half, empty or nearly empty.

Compare two or more containers, which has more liquid in? Which has less?

Use the words 'more' or 'less' to compare the containers. Choose a range of different containers, a measuring jug and explore practically using water or sand.

