



Date: Wednesday 6.5.2020

LO: To count in multiples of ten

Success Criteria:

- | |
|---|
| 1. Use 100 square grid |
| 2. Look at the number track |
| 3. Complete the missing numbers on the number track |
| 4. If unsure use the 100 square grid to help |

Model

Children count in tens.

1	2	3	4	5	6	7	8	9	10
11	12	13	14	15	16	17	18	19	20
21	22	23	24	25	26	27	28	29	30
31	32	33	34	35	36	37	38	39	40
41	42	43	44	45	46	47	48	49	50
51	52	53	54	55	56	57	58	59	60
61	62	63	64	65	66	67	68	69	70
71	72	73	74	75	76	77	78	79	80
81	82	83	84	85	86	87	88	89	90
91	92	93	94	95	96	97	98	99	100

0	10	20		40			70			100
---	----	----	--	----	--	--	----	--	--	-----

Complete the numbers on the number track.

Year 1 Maths

Date: Wednesday 6.5.2020

LO: To count in multiples of ten

Success Criteria:

1. Use 100 square grid
2. Look at the number track
3. Complete the missing numbers on the number track
4. If unsure use the 100 square grid to help

Model:

Colour in the tens column on the tens frame.

1	2	3	4	5	6	7	8	9	10
11	12	13	14	15	16	17	18	19	20
21	22	23	24	25	26	27	28	29	30
31	32	33	34	35	36	37	38	39	40
41	42	43	44	45	46	47	48	49	50
51	52	53	54	55	56	57	58	59	60
61	62	63	64	65	66	67	68	69	70
71	72	73	74	75	76	77	78	79	80
81	82	83	84	85	86	87	88	89	90
91	92	93	94	95	96	97	98	99	100

	10				50	60		80		100
--	----	--	--	--	----	----	--	----	--	-----

Complete the numbers on the number track.

Task 1

Please scroll down for larger version of these.

Counting in 10s

0	10	20		40			70			100
---	----	----	--	----	--	--	----	--	--	-----

	10				50	60		80		100
--	----	--	--	--	----	----	--	----	--	-----

0		20		40		60		80		100
---	--	----	--	----	--	----	--	----	--	-----

	10		30		50		70		90	
--	----	--	----	--	----	--	----	--	----	--

0										100
---	--	--	--	--	--	--	--	--	--	-----

Counting in 10s

20		40						100	110	
----	--	----	--	--	--	--	--	-----	-----	--

60	70		90		110			140		160
----	----	--	----	--	-----	--	--	-----	--	-----

30		50		70		90	100			
----	--	----	--	----	--	----	-----	--	--	--

70				110	120	130				170
----	--	--	--	-----	-----	-----	--	--	--	-----

100		120			150			180		200
-----	--	-----	--	--	-----	--	--	-----	--	-----

Task 2

How many muffins are there altogether?




There are muffins on each tray.

There are trays.

There are muffins altogether.

Task 3

How many apples are there altogether?





There are apples on each ten frame.

There are ten frames.

There are apples altogether.

Task 4

Complete the number tracks.



Counting in 10s

20		40						100	110	
----	--	----	--	--	--	--	--	-----	-----	--

60	70		90		110			140		160
----	----	--	----	--	-----	--	--	-----	--	-----

30		50		70		90	100			
----	--	----	--	----	--	----	-----	--	--	--

70				110	120	130				170
----	--	--	--	-----	-----	-----	--	--	--	-----

100		120			150			180		200
-----	--	-----	--	--	-----	--	--	-----	--	-----