

Canonbury Home Learning

Year 1 Maths

Steppingstone activity



Date: Thursday 7.5.2020





LO: To explore making equal groups

Success Criteria:

- | |
|---|
| 1. Choose small objects in your house |
| 2. Make a group of objects , eg 2 lego bricks |
| 3. Make equal groups with more small objects |

Model

Use objects in your house to make equal groups.



4 equal groups of 2. Can you count the groups in twos. How many pieces of lego are there altogether ? There are _____ altogether.

Year 1 Maths

Date: Thursday 7.5.2020

LO: To explore making equal groups

Success Criteria:

| |
|--|
| 1. Choose small objects in your house |
| 2. Make a group of objects , eg 5 pieces of pasta |
| 3. Make equal groups with more small objects and record your answers. |

Model:

Use objects in your house to make equal groups.

I have used pasta.



6 equal groups of 5. Can you count the groups in 5s? How many pieces of pasta are there altogether? There are _____ altogether.

Year 1 Maths

Main activity Complete at least 2 tasks, more if you can.

Task 1

Use objects in your house to make these groups.

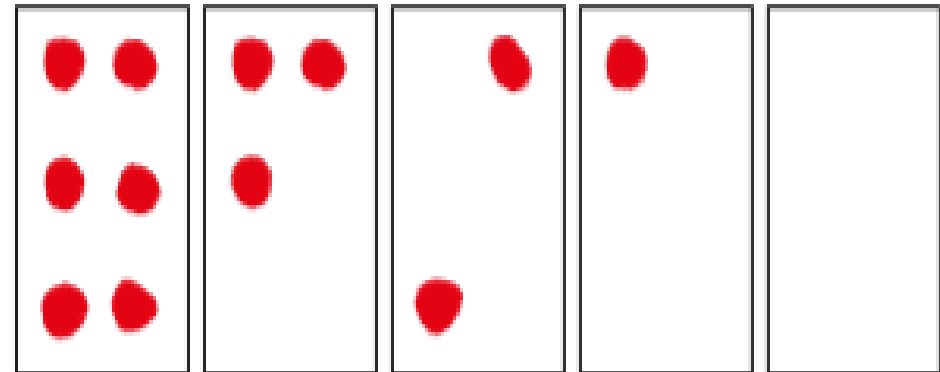
- 5 equal groups of 3
- 3 equal groups of 5
- 4 equal groups of 6
- 2 equal groups of 10

Talk about your answers.

Task 2

Kim is drawing 5 equal groups of 6.

Finish Kim's drawing.




Task 3


Match the pictures to the labels.



equal groups



unequal groups



Task 4

Complete the sentences.



There are equal groups of



There are equal groups of