

Canonbury Home Learning

Year 1 Maths

Date: Tuesday 7.7.2020


LO: To recognise coins.

Watch the interactive video on White Rose Home Learning



<https://whiterosemaths.com/homelearning/year-1/>



Summer Term - Week 10 (w/c 29th June)

Lesson 2 - Recognising coins

is greater than $>$ is less than $<$ Have a go 

Let's compare

 is greater than 
 $>$

 is less than 
 $<$

Success Criteria:

- | |
|---|
| 1. Watch the video and pause it to answer the questions. |
| 2. Ask an adult at home to look at a collection of their coins. |
| 3. Work with an adult at home and go through the names of each coin. Then try and go back and name the coins yourself independently. Place the coins in order from smallest to greatest in value. |
| 4. Answer the questions on the worksheet. |

Model

Today we are going to recognise coins.



How can we sort these coins?

We can sort them by colour, size, shape and words.

Let's put these coins in order. Smallest to greatest value



It is not the size we are putting in order, we are going to think about how much they are worth?

We are first of all going to look at the numbers on the coins to put them in order from smallest to greatest value. Can you find the coin with the smallest number?















is greater than $>$

is less than $<$

We are going to compare the coins using greater than and less than.

Can you compare each of these two coins?

Let's compare

		
<hr/>		
		
<hr/>		
		
	is greater than	
	$>$	
	is less than	
	$<$	
	is greater than	
	$>$	

How many?



Have a go



There are 5p coins

There are 50p coins

There are 1p coins

There are 2p coins

Try and do all 4 questions

1 Match the coin to the amount.



- 20 pence
- 5 pence
- 10 pence
- 1 pound
- 1 pence
- 50 pence
- 2 pence
- 2 pounds

2 Here are some coins.



Complete the sentences.

- There are 1p coins.
- There are 2p coins.
- There is 5p coin.
- There are 10p coins.
- There are 20p coins.

3 Write < or > to compare the amounts.



4 Mo has one coin in his hand.



I have more than 2 pence,
but less than 1 pound.

Draw Mo's coin.



What is the value of Mo's coin?

p

Is there more than one answer?