

Canonbury Home Learning

Year 1 Maths

Date: Wednesday 8.7.2020

LO: To recognise notes.

Watch the interactive video on White Rose Home Learning

<https://whiterosemaths.com/homelearning/year-1/>

Summer Term - Week 10 (w/c 29th June)

Lesson 3 - Recognising notes

is greater than
>

is less than
<

Have a go



Let's compare



Success Criteria:

1. Watch the video and pause it to answer the questions.
2. Ask an adult at home to look at a collection of their notes.
3. Work with an adult at home and go through the names of each note. Then try and go back name the notes yourself independently.
Place the notes in order from the least to the greatest in value.
4. Answer the questions on the worksheet.

Today we are going to recognise notes.

How can we sort these notes?



We are not able to sort them by shape because they are all rectangles.

We are not able to sort them by pictures because they all have the Queen on them.

We can sort them by colour, size and numbers. We can see the value by looking at the numbers.

Let's put these notes in order.
From least to greatest value.



We are not talking about size. We are talking about value.

Which one has the least value? The smallest number?

ten pounds

fifty pounds



five pounds

twenty pounds







is greater than >






is less than <

We are going to compare the notes using greater than and less than.

Can you compare each of these two notes?

Let's compare

	is greater than >	
	is less than <	
	is greater than >	

How many?



Have a go



There are £5 notes

There are £50 notes

Canonbury Home Learning

Try and do all 6 questions

1 Match the note to its value.



5 pounds



20 pounds



10 pounds



50 pounds

2 Dan has two £10 notes and one £5 note.

Circle the notes that Dan has.



3 Here are some notes.



Complete the sentences.

There are £5 notes.

There are £10 notes.

There are £20 notes.

There are £50 notes.

4 Tick the note with the smaller value.

a)



b)



c)



5 Write $<$, $>$ or $=$ to compare the amounts.

a)  50 pounds

b) 20 pounds 

c)  10 pounds

6 Kim has some money.



Do you agree with Kim? _____

Talk about your answer.