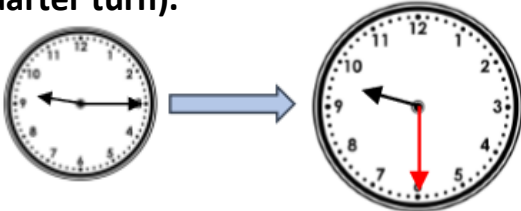


Task 1

Practice

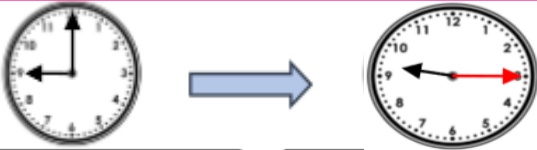
Draw where the minute hand will be in 15 minutes time (a quarter turn).



Quarter past 9 Half past 9



Half past 8 Quarter to 9



9 o'clock Quarter past 9



3 o'clock **Quarter past 3**

Task 2

Reasoning

Explain your answers.

8a. Tyler is wrong. He has mixed up the hands and miscounted the hours around the clock. It is quarter past 6.

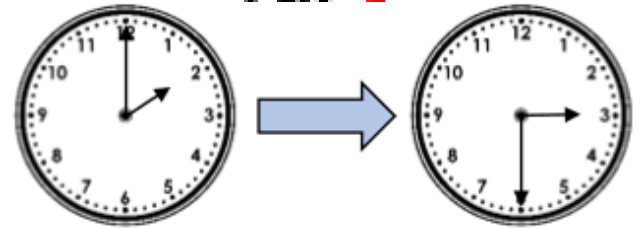
8b. Zoe might be right. In 15 minutes, it will be 12 o'clock but it could be noon or midnight.

Task 3

Problem solving

4a. How many quarters of an hour are between 2 o'clock and half past 3?

4a. 6



4b. How many quarters of an hour are between half past 12 and 3 o'clock?

4b. 10

