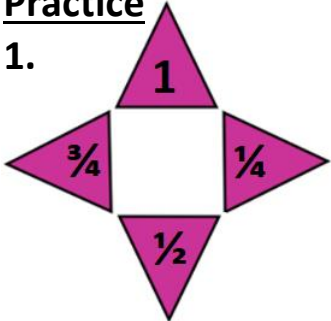
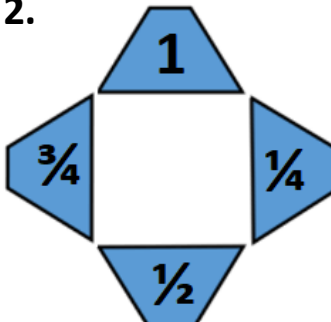
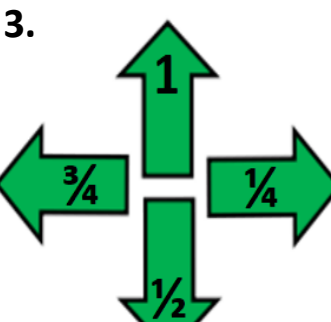






Task 1	Task 2	Task 3	Task 4
<p>Practice</p> <p>1. </p> <p>2. </p> <p>3. </p>	<p>Practice</p> <p>Complete the sentence stems to describe how the triangle has moved.</p> <p>1. This triangle has made a quarter turn.</p> <p></p> <p>2. This triangle has made a half turn.</p> <p></p> <p>3. This triangle has made a quarter turn anti-clockwise.</p> <p></p> <p>4. This triangle has made a quarter turn clockwise.</p> <p></p>	<p>Reasoning</p> <p>Explain your answers.</p> <p>4a. The first frog has made a three quarter turn clockwise and the second has made a half turn clockwise.</p> <p>4b. The first frog has made a whole turn clockwise and the second has made a quarter turn clockwise.</p>	<p>Problem solving</p> <p>6a. 2 ways: a three quarter turn clockwise or a quarter turn anti-clockwise.</p> <p>6b. 2 ways: a quarter turn clockwise or a three quarter turn anti-clockwise.</p>