








Task 1	Task 2	Task 3	Task 4
<p><u>Practice</u> Draw the missing shapes in these patterns.</p> <p>1. </p> <p>2. </p> <p>3. </p> <p>4. </p>	<p><u>Practice</u></p> <p>1. Turn the shape a quarter turn in a clockwise direction each time. </p> <p>2. Turn the shape a quarter turn in an anti-clockwise direction each time OR a three quarter turn clockwise. </p> <p>3. Turn the shape a quarter turn in a clockwise direction each time OR a three quarter turn anti-clockwise. </p>	<p><u>Reasoning</u> Explain your answers.</p> <div data-bbox="907 406 1505 598" style="border: 1px solid green; padding: 5px;"> <p>4a. Example answer: 4 is incorrect because the pattern is both shapes make a quarter turn clockwise each time.</p> </div> <div data-bbox="907 944 1505 1136" style="border: 1px solid green; padding: 5px;"> <p>4b. Example answer: 6 is incorrect because the pattern is both shapes make a half turn each time.</p> </div>	<p><u>Problem solving</u></p> <div data-bbox="1550 370 2190 577" style="border: 1px solid blue; padding: 5px;"> <p>6a. Any combination/pattern of the given shapes which includes 1 turn in either a clockwise or anti-clockwise direction.</p> </div> <div data-bbox="1550 922 2190 1129" style="border: 1px solid blue; padding: 5px;"> <p>6b. Any combination/pattern of the given shapes which includes 1 turn in either a clockwise or anti-clockwise direction.</p> </div>