



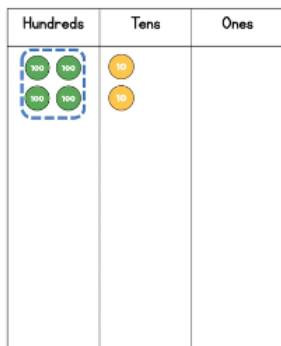
Summer week 4 Lesson 2 – 12.05.20

LO: To divide with remainders

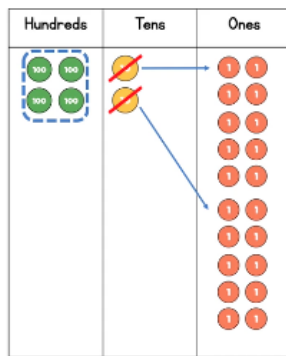
Success Criteria:

1. First look at the hundreds and move up the columns.
2. If you have any left over after dividing, carry over to the next place value column
3. Any amount left over at the end is your remainder – see last image.

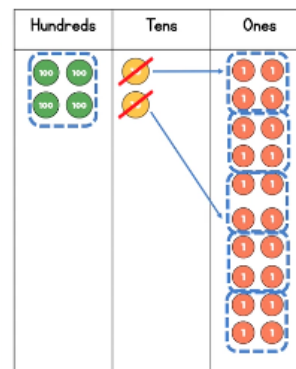
Model



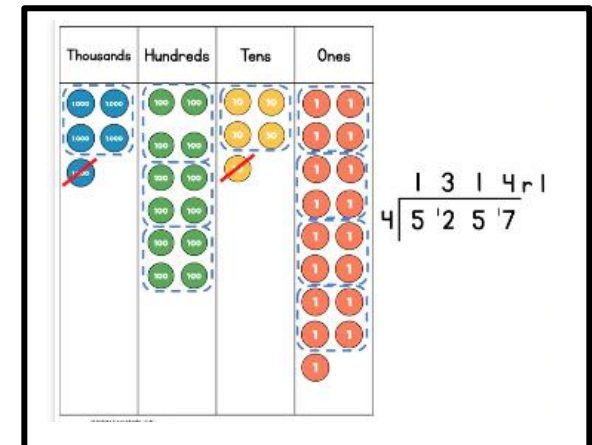
$$\begin{array}{r} 1 \\ 4 \overline{) 420} \end{array}$$



$$\begin{array}{r} 10 \\ 4 \overline{) 420} \end{array}$$

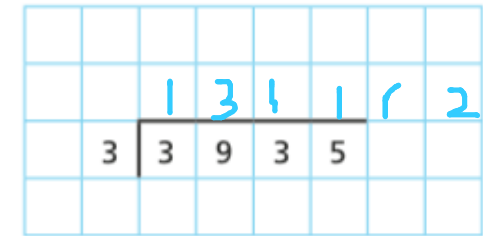
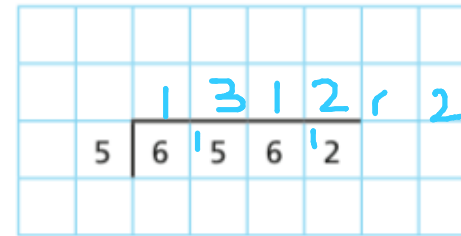
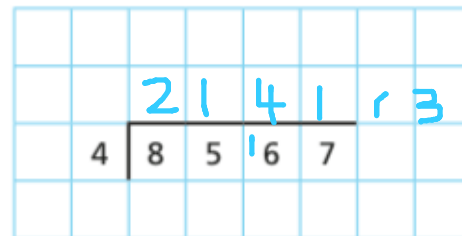
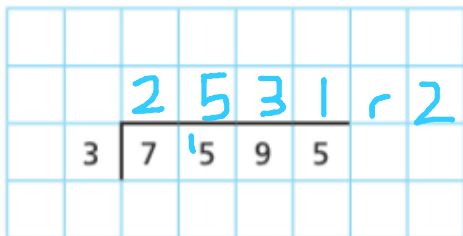


$$\begin{array}{r} 105 \\ 4 \overline{) 420} \end{array}$$



$$\begin{array}{r} 1314r1 \\ 4 \overline{) 5257} \end{array}$$

Now complete these divisions:



Make up some of your own

Canonbury Home Learning

Year 5 Maths

Summer week 4 Lesson 2 – 12.05.20

LO: To divide with remainders

Success Criteria:

- | |
|--|
| 1. First look at the hundreds and move up the columns. |
| 2. If you have any left over after dividing, carry over to the next place value column |
| 3. Any amount left over at the end is your remainder – see last image. |

Model:

$$\begin{array}{r} 1728 \text{ r}1 \\ 3 \overline{) 5185} \end{array}$$

Round
down

There are 5,185 pencils. A box holds three pencils. How many full boxes are there? 1,728

How many are left over? 1

There are 5,185 pencils. A box holds three pencils. How many boxes are needed to hold all the pencils? 1,729

Round up

Task 1

Write the calculations in the correct column of the table.

$5,066 \div 4$	$9,513 \div 4$	$1,234 \div 4$
$6,562 \div 4$	$6,563 \div 4$	$9,515 \div 4$


Remainder of 1	Remainder of 2	Remainder of 3	Remainder of 4
$9,513 \div 4$	$5,066 \div 4$ $6,562 \div 4$ $1,234 \div 4$	$6,563 \div 4$ $9,515 \div 4$	

Are any columns empty? Why?

Task 2

7,816	7,861	6,781	1,786
-------	-------	-------	-------

I know that if I divide these numbers by 5 the remainder will be 1



Is Eva correct? Yes
How do you know?

There are 459 children in a school.
They are sitting at tables in groups of 7

We will need 65 tables.



Do you agree with Mo? NO
Explain your answer.

Task 3

2	3	4	5

□ □ □ ÷ □

a) How many ways can you complete the calculation using all the digit cards so that there is a remainder of 1?

b) What do you notice?

Eg. $325 \div 4 = 81 \text{ r } 1$

Dora is thinking of a number between 500 and 600

When she divides it by a 1-digit number it has a remainder of 4

What could Dora's number be?

