

Canonbury Home Learning
Year 5 Maths
Steppingstone activity



Week 1 Lesson 2 – 21.04.20

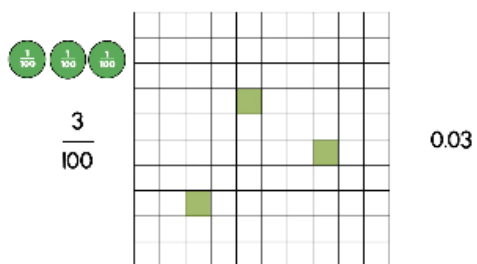
LO: To recognise decimals as fractions

Success Criteria:

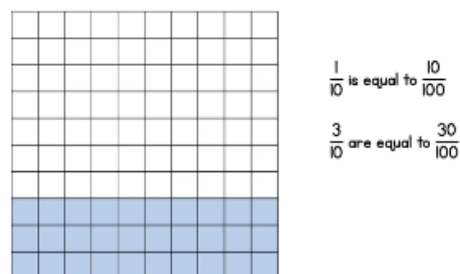
- | |
|--|
| 1. Remember $1/100 = 0.01$ |
| 2. Remember $10/100 = 1/10 = 0.1$ |
| 3. Remember to use your place value columns from yesterday's work. |

Model The decimal point separates the whole numbers from the decimals or parts of the number.

A 100 square can be divided into hundredths

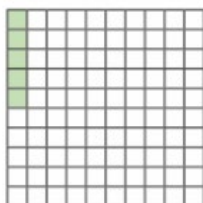


Each row or column is equivalent to one tenth



Now you try these:

The hundred square represents 1 whole.



a) What fraction is represented by the shaded squares?

$\frac{5}{100}$

b) Convert the fraction to a decimal.

0.05

What fractions and decimals do the counters represent?



fraction = $\frac{4}{100}$

decimal = 0.04



fraction = $\frac{6}{100}$

decimal = 0.06



fraction = $\frac{7}{10}$

decimal = 0.7

Canonbury Home Learning
Year 5 Maths

Week 1 Lesson 1 – 21.04.20

LO: To recognise decimals as fractions

Success Criteria:

You are going to practise Decimals!

Success Criteria:

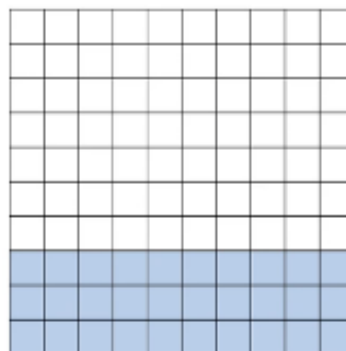
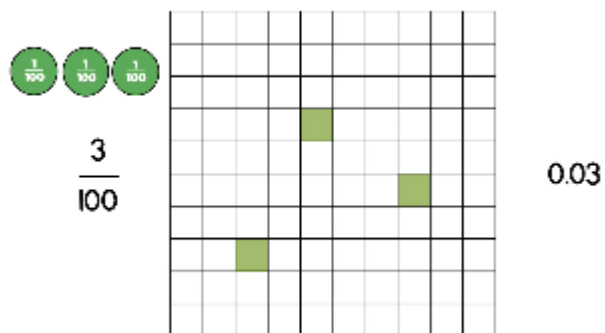
- | |
|--|
| 1. Remember $1/100 = 0.01$ |
| 2. Remember $10/100 = 1/10 = 0.1$ |
| 3. Remember to use your place value columns from yesterday's work. |

Model:


A 100 square can be divided into hundredths split into fifths – every 2 rows is $1/5$

Each row or column is equivalent to one tenth

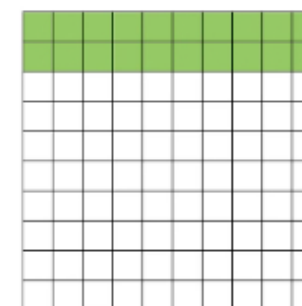
A 100 square can also be



$\frac{1}{10}$ is equal to $\frac{10}{100}$
 $\frac{3}{10}$ are equal to $\frac{30}{100}$



$$\frac{1}{5}$$



$$\frac{1}{5} = \frac{2}{10} = 0.2$$

Canonbury Home Learning

Year 5 Maths

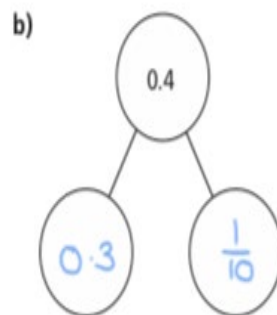
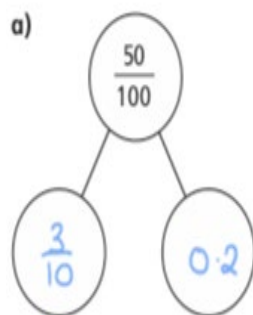
Main activity Week 3 Lesson 2 – 21.04.20

Complete at least 2 columns, more if you can!

Complete the table.

Fifths	Tenths	Decimals
$\frac{1}{5}$	$\frac{2}{10}$	0.2
$\frac{2}{5}$	$\frac{4}{10}$	0.4
$\frac{3}{5}$	$\frac{6}{10}$	0.6
$\frac{4}{5}$	$\frac{8}{10}$	0.8

Complete the part-whole models using fractions or decimals.



Write <, > or = to complete the statements.

a) $0.4 = \frac{40}{100}$

d) $0.5 > \frac{5}{100}$

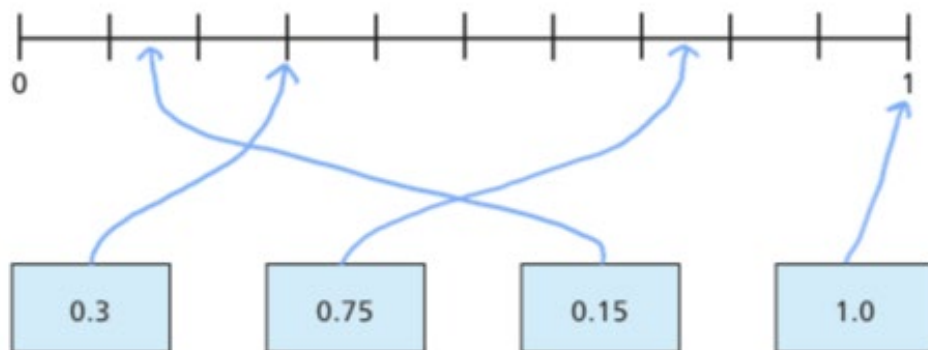
b) $0.02 < \frac{20}{100}$

e) $0.88 = \frac{88}{100}$

c) $0.6 = \frac{6}{10}$

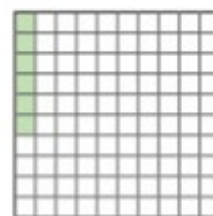
f) $0.88 < \frac{89}{100}$

Here is a number line.



Draw arrows from the numbers to show their place on the line.

Huan says he has coloured 0.6 of the hundred square.



Explain the mistake that Huan has made.

He has coloured in 6 hundredths
not 6 tenths.