

Starter

Check each calculation shown below. What calculation can you use to check? If there's a mistake, correct it!

$$65 + 32 = 97$$

$$92 \div 4 = 23$$

$$127 + 165 = 281$$

$$42 \times 3 = 116$$

$$56 \div 7 = 8$$

$$658 - 245 = 413$$

$$250 \div 10 = 24$$

$$293 - 186 = 113$$



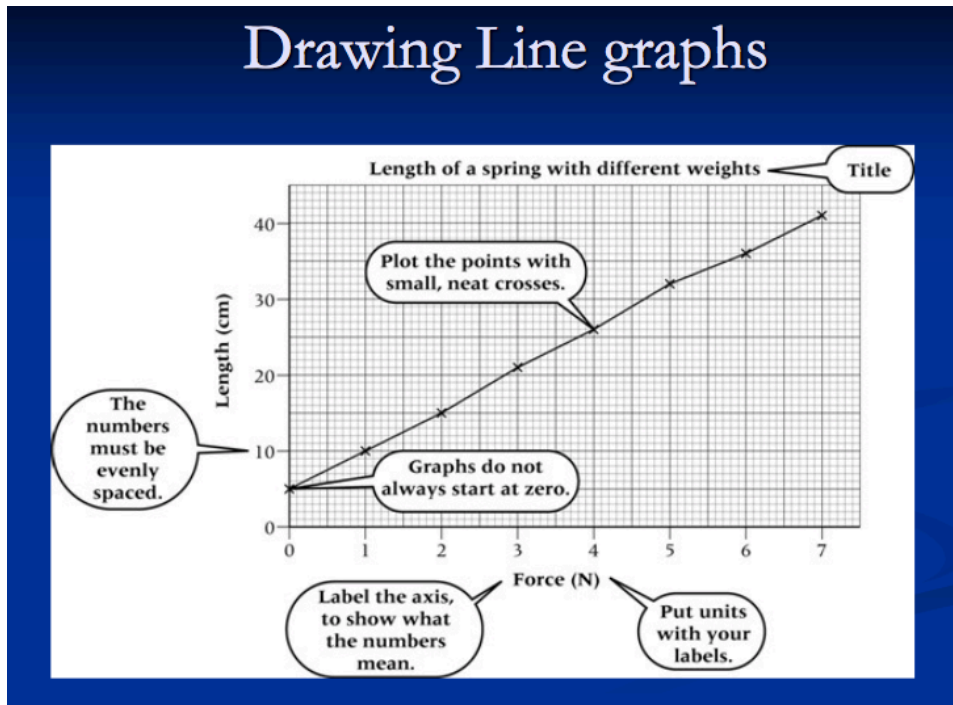
Summer week 8 Lesson 5 – 19.06.20

LO: To Draw Line Graphs

Success Criteria:

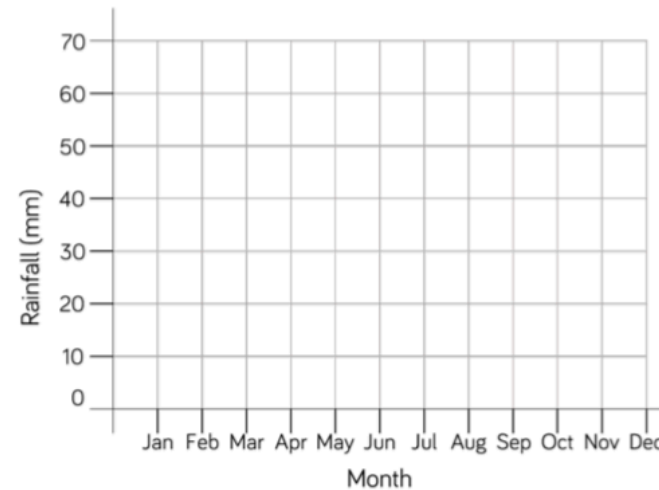
- | |
|---|
| 1. Look at data and work out the scale for your Y axis – what is the greatest amount? |
| 2. Draw and label both axis and give your graph a title. |
| 3. Plot points with dots or small neat crosses |
| 4. Join your points. |

Model



Now complete this:

The table shows average rainfall in Leicester over a year.
 Complete the graph using the information from the table.



| Month | Rainfall (mm) |
|-------|---------------|
| Jan | 54 |
| Feb | 40 |
| Mar | 38 |
| Apr | 38 |
| May | 48 |
| Jun | 46 |
| Jul | 58 |
| Aug | 60 |
| Sep | 50 |
| Oct | 57 |
| Nov | 65 |
| Dec | 50 |

Make up 3 questions you could ask about your graph.

Canonbury Home Learning
Year 4/5 Maths

Summer week 8 Lesson 5 – 19.06.20

LO: To draw line graphs

Success Criteria:

| |
|---|
| 1. Look at data and work out the scale for your Y axis – what is the greatest amount? |
| 2. Draw and label both axis and give your graph a title. |
| 3. Plot points with dots or small neat crosses |
| 4. Join your points. |

Mild/ Spicy

Here is a table showing the conversion between pounds and rupees. Present the information as a line graph.

| | | | | | | | | | | |
|---------------|----|-----|-----|-----|-----|-----|-----|-----|-----|-----|
| Pounds | 1 | 2 | 3 | 4 | 5 | 6 | 7 | 8 | 9 | 10 |
| Rupees | 80 | 160 | 240 | 320 | 400 | 480 | 560 | 640 | 720 | 800 |

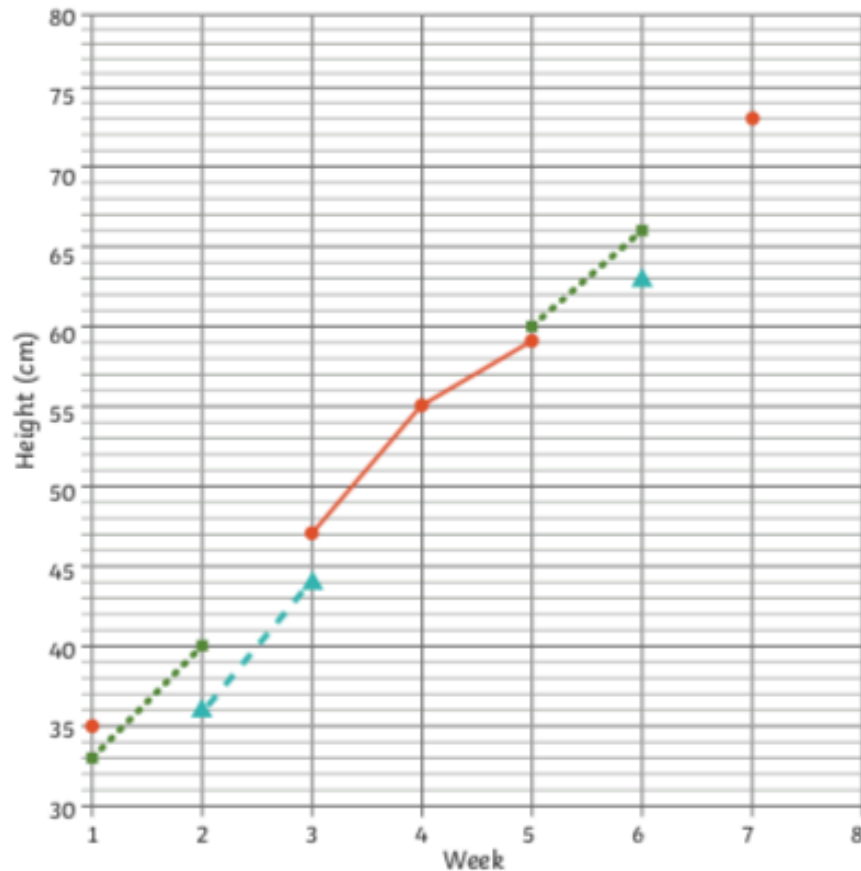
Now ask and answer 4 questions about your graph.

Canonbury Home Learning
Year 4/5 Maths
Summer week 8 Lesson 1 – 19.06.20

Red Hot

Draw and finish this graph using the clues.

●●● Daisy's Sunflower
-▲- Marlon's Sunflower
—●— Rami's Sunflower



- 1) In week 1, Marlon's sunflower was 2cm shorter than Daisy's sunflower.
- 2) In week 2, there was a 6 cm height difference between Marlon's and Rami's sunflowers. Rami's sunflower was taller than Marlon's.
- 3) In week 3, Daisy's sunflower was taller than Marlon's but shorter than Rami's. Its height was an odd number of cm.
- 4) By week 4, Daisy's sunflower had grown 18cm since week 1. However, it was still 1cm shorter than Marlon's sunflower.
- 5) In week 5, Rami's sunflower was 1cm taller than Marlon's.
- 6) In week 6, Daisy's sunflower was 1cm taller than Rami's.
- 7) By week 7, Rami's sunflower was the tallest, towering 5cm over Marlon's sunflower and 2cm over Daisy's.
- 8) By the end of the investigation, Rami's sunflower had grown the tallest. It had grown 40cm from its starting height.

