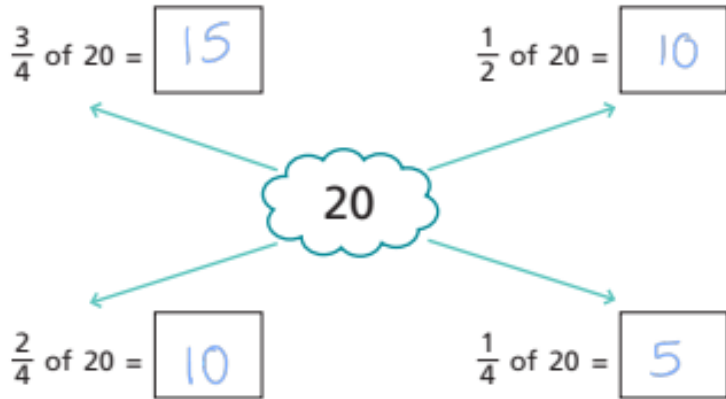


Canonbury Home Learning
Lesson 34

Steppingstone activity answers



5 Write the missing numbers.



6 Solve the problems.

a) Find $\frac{2}{4}$ of £8

£ 4

b) Find $\frac{2}{4}$ of 24 kg

12 kg

How did you work out the answers?

7 Write the missing number.

$$\frac{1}{2} = \frac{\boxed{2}}{4}$$

8



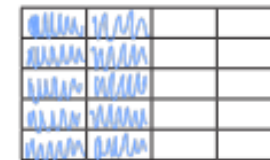
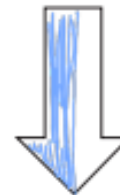
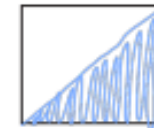
You cannot find $\frac{2}{4}$ of this shape as you cannot divide it into 4 equal parts.



a) Do you agree with Dexter? No

Talk about it with a partner.

b) Colour $\frac{2}{4}$ of each shape.



Talk to a partner about how you did it.

Canonbury Home Learning
Lesson 34 Year 3 Maths – Main activity **answers**

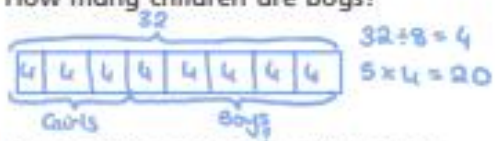
Fractions of a set of objects (3)

Maths

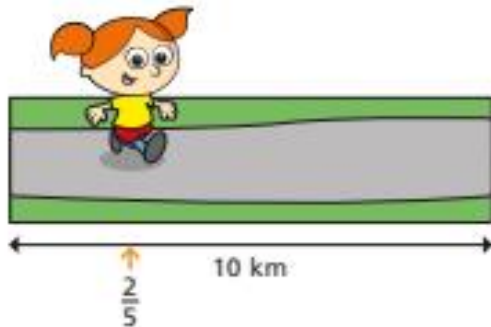


- 1 In a class of 32 children, three eighths are girls.
How many children are boys?

20



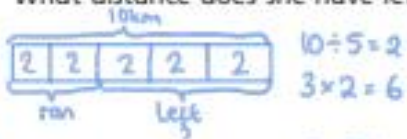
- 2 Alex is taking part in a 10 km race.



She has run two fifths of the race.

What distance does she have left to run?

6 km



- 3 Filip has £3 and 20p.



He spends half of his money.

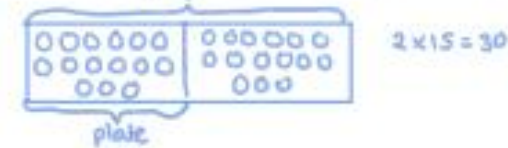
How much does he have left?

£ 1 and 60 p

- 4 Teddy opens a bag of cherries and puts $\frac{1}{2}$ on a plate.



How many cherries were there in the whole bag?



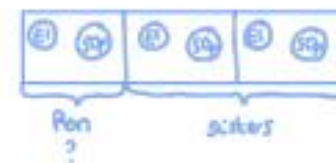
30

- 5 Ron has £4 and 50p.

He decides to share the money equally between himself and his two sisters.



How much money will each child get?



£ 1 and 50 p

- 6 A bag of potatoes weighs 500 g.

Annie's dad uses one quarter of the potatoes to make a shepherd's pie.



What is the mass of the potatoes left in the bag?



375 g

7 Dexter spends one third of his money.

He has these coins left.

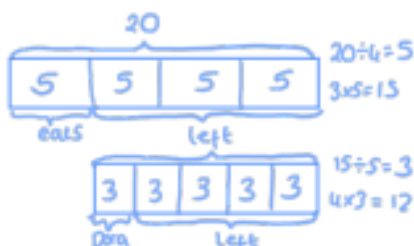


How much did Dexter spend?



£ and p

8 Eva has a bag of 20 sweets.



She eats $\frac{1}{4}$ of the sweets.

She gives $\frac{1}{5}$ of the sweets that are left to Dora and 2 sweets to her mum.

How many sweets does Eva have left? $12 - 2 = 10$

9 Whitney has a box of raisins.

She eats $\frac{1}{4}$ of the raisins and gives 3 to her brother.

She has 9 raisins left.

How many raisins were in the box at the start?

